

Ysgol Uwchradd Caergybi Mathematics Department Homework Pack

Year 7 Module 1 Intermediate

Topic	Page	Date	Mark %	Comments / To Improve
Numeracy 1	1
Add / Sub			
Numeracy 2	2
Multiplication			
Numeracy 3	3
Division			
Numeracy 4	4
Mult grid			
Numeracy 5	5
Mixed			
Numeracy 6	6
Mult grid			
Challenges	7
			

Name

Class Teacher

Name Numeracy 1

$$\frac{\dots}{25} \times 100 = \dots\%$$

ADDITION

NON CALCULATOR

1.

$$\begin{array}{r} 78 \\ + 65 \\ \hline \\ \hline \end{array}$$

2.

$$\begin{array}{r} 83 \\ + 58 \\ \hline \\ \hline \end{array}$$

3.

$$\begin{array}{r} 87 \\ + 94 \\ \hline \\ \hline \end{array}$$

4.

$$\begin{array}{r} 668 \\ + 82 \\ \hline \\ \hline \end{array}$$

5.

$$\begin{array}{r} 376 \\ + 248 \\ \hline \\ \hline \end{array}$$

6.

$$\begin{array}{r} 564 \\ + 559 \\ \hline \\ \hline \end{array}$$

SUBTRACTION

NON CALCULATOR

7

$$\begin{array}{r} 96 \\ - 39 \\ \hline \\ \hline \end{array}$$

8.

$$\begin{array}{r} 85 \\ - 27 \\ \hline \\ \hline \end{array}$$

9.

$$\begin{array}{r} 72 \\ - 56 \\ \hline \\ \hline \end{array}$$

10.

$$\begin{array}{r} 643 \\ - 62 \\ \hline \\ \hline \end{array}$$

11.

$$\begin{array}{r} 933 \\ - 555 \\ \hline \\ \hline \end{array}$$

12.

$$\begin{array}{r} 654 \\ - 456 \\ \hline \\ \hline \end{array}$$

2 Marks each – 1 Mark for Effort

To improve I need to

Name Numeracy 2

$$\frac{\dots}{25} \times 100 = \dots\%$$

MULTIPLICATION

NON CALCULATOR

1. 7 8
 x 5

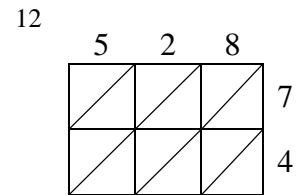
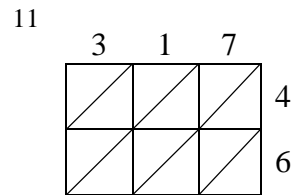
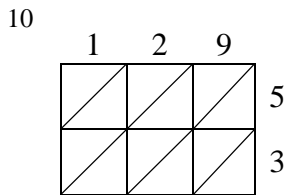
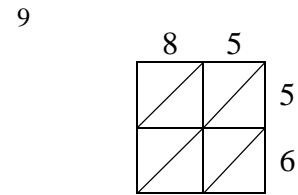
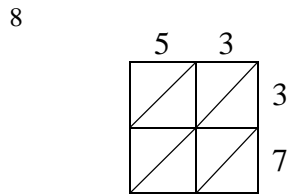
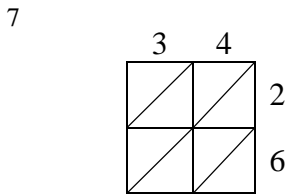
2. 8 3
 x 8

3. 8 7
 x 4

4. 6 7 8
 x 6

5. 5 2 7
 x 5

6. 8 4 6
 x 9



2 Marks each – 1 Mark for Effort

To improve I need to

Name Numeracy 3

$$\frac{\dots}{25} \times 100 = \dots\%$$

NON CALCULATOR

1

$$3 \overline{) 129}$$

2

$$4 \overline{) 528}$$

3

$$8 \overline{) 848}$$

4

$$4 \overline{) 352}$$

5

$$7 \overline{) 189}$$

6

$$9 \overline{) 648}$$

7

$$5 \overline{) 2295}$$

8

$$7 \overline{) 4403}$$

9

$$12 \overline{) 540}$$

WITH REMAINDERS, Write the remainder as a fraction

10

$$5 \overline{) 461}$$

11

$$6 \overline{) 740}$$

12

$$8 \overline{) 525}$$

2 Marks each – 1 Mark for Effort

To improve I need to

Name Numeracy 4

.....%

NON CALCULATOR Complete the multiplication grid

X	1	2	3	4	5	6	7	8	9	10
1										
2										
3										
4										
5										
6										
7										
8										
9										
10										

Name Numeracy 5

$$\frac{\dots}{25} \times 100 = \dots\%$$

MIXED

1.
$$\begin{array}{r} 87 \\ + 58 \\ \hline \\ \hline \end{array}$$

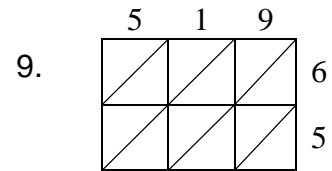
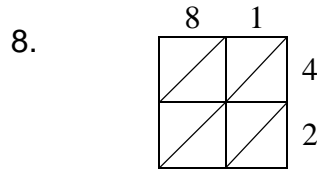
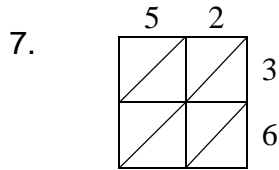
2.
$$\begin{array}{r} 367 \\ + 492 \\ \hline \\ \hline \end{array}$$

3.
$$\begin{array}{r} 345 \\ - 168 \\ \hline \\ \hline \end{array}$$

4.
$$\begin{array}{r} 837 \\ - 594 \\ \hline \\ \hline \end{array}$$

5.
$$\begin{array}{r} 436 \\ \times \quad 6 \\ \hline \\ \hline \end{array}$$

6.
$$\begin{array}{r} 782 \\ \times \quad 8 \\ \hline \\ \hline \end{array}$$



10.
$$5 \overline{) 635}$$

11.
$$8 \overline{) 3656}$$

12.
$$12 \overline{) 1476}$$

2 Marks each – 1 Mark for Effort

To improve I need to

Name Numeracy 6

.....%

NON CALCULATOR Complete the multiplication grid

X	7	5	8	3	4	10	2	11	6	9
11										
8										
4										
5										
2										
6										
3										
10										
7										
9										

Name

Challenge

$$\frac{\dots}{14} \times 100 \dots\%$$

1. My granny saves two pence pieces in a jar. When I went to see her, she said she had £13.48. How many two pence pieces make this total?

.....
.....

2. I set off with a twenty pound note and buy a magazine that costs £5.95, some sweets that cost £4.50 and a new pen. I am given £4.25 change. How much is the pen?

.....
.....

3. Every week granny puts her change into a pot. At the end of the month she spills it out onto the table and counts up how much she has saved. Last month she had 23 two pence coins, 14 pennies and eight 5p pieces. How much has she saved?

.....
.....

4. How many minutes are there in one day?

.....
.....

5. At the end of running the local marathon my watch said I finished at 16:22. I took 3 hours 45 minutes to complete the marathon. What time did my watch say I started the marathon?

.....
.....

6. Fred is facing NE. In which direction will he be facing if he turns clockwise through 3 right angles?

.....
.....

7. How many 250 millilitre glasses can be filled from a 2.5 litre jug?

.....